

NAME: _____

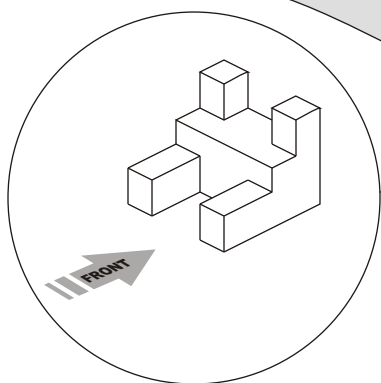
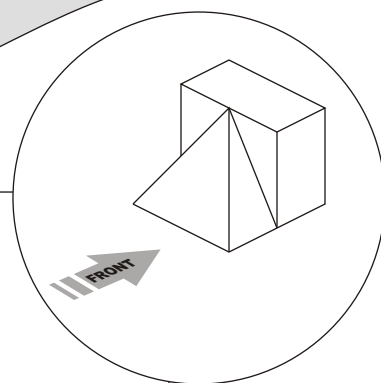
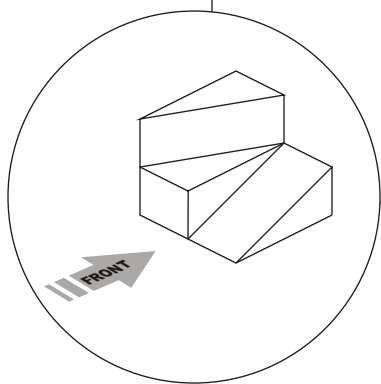
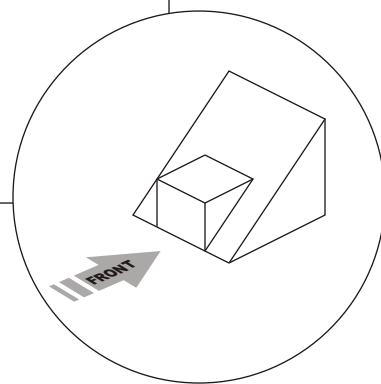
SCORE: _____

FRONT VIEWS

DIRECTIONS: Look at each of the Isometric Shapes and sketch the front view of each shape in the spaces provided.

This extra credit activity is worth 20 points.

- EXTRA CREDIT - #1

A large, empty rectangular box intended for the student to sketch the front view of the first isometric shape.A large, empty rectangular box intended for the student to sketch the front view of the second isometric shape.A large, empty rectangular box intended for the student to sketch the front view of the third isometric shape.A large, empty rectangular box intended for the student to sketch the front view of the fourth isometric shape.